

ELEC301 - Problem set 1

- Find the Thevenin equivalent of the circuit shown in figure 1. Let the $2\text{ k}\Omega$ resistor be the load (i.e., do not include it in the Thevenin equivalent circuit).

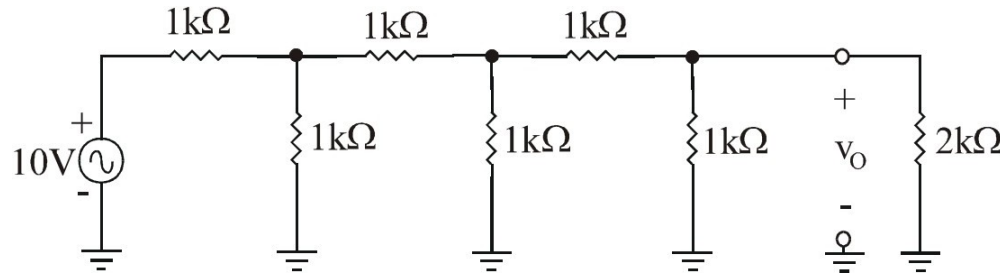


Figure 1.

- Find both the Thevenin and Norton Equivalents of circuit shown in figure 2. Let the $1\text{ k}\Omega$ resistor be the load.

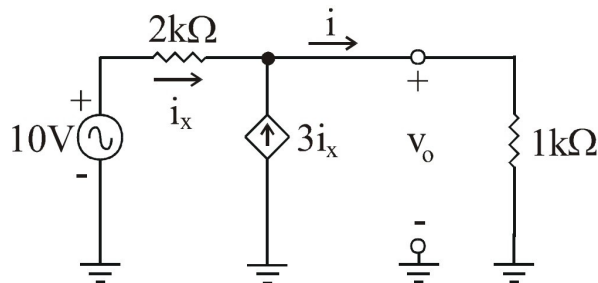


Figure 2.

- A voltage source provides an open circuit voltage of 10 V and a short circuit current of 1 mA , what is the internal resistance of the source? (answer: $10\text{ k}\Omega$).
- A voltage source produces 1 V when loaded by a $100\text{ k}\Omega$ resistor and 0.5 V when loaded by a $10\text{ k}\Omega$ resistor. Calculate the Thevenin voltage, the Norton current, and the internal resistance. (answers: $V_T = 1.125\text{V}$, $I_N = 0.09\text{ mA}$, and $R_s = 12.5\text{ k}\Omega$).
- Use Miller's theorem to find the transfer function for the circuit shown in figure 3

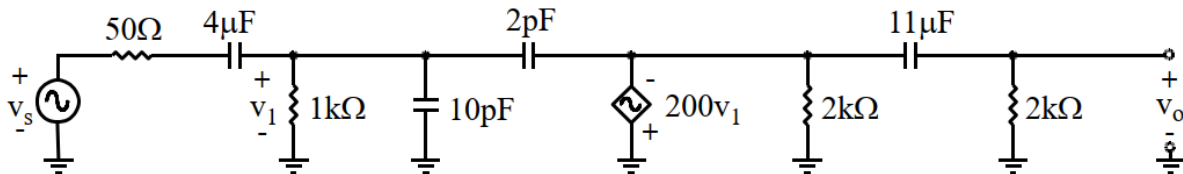


Figure 3

- For the circuit shown in Figure 4, use Thevenin and Miller's theorems at high frequencies to transform the 1 pF capacitor to two equivalent capacitances correctly located at the input and output stages.
 - Draw the transformed input and output stages.

- b) Find the mid band gain, A_M , in decibels and the phase at mid band, ϕ_M , in radians for the new, transformed circuit.
- c) Find the location of each pole and each zero for the new, transformed circuit.
- d) Find the transfer function for the circuit shown in figure 4 and estimate ω_{L3dB} and ω_{H3dB}

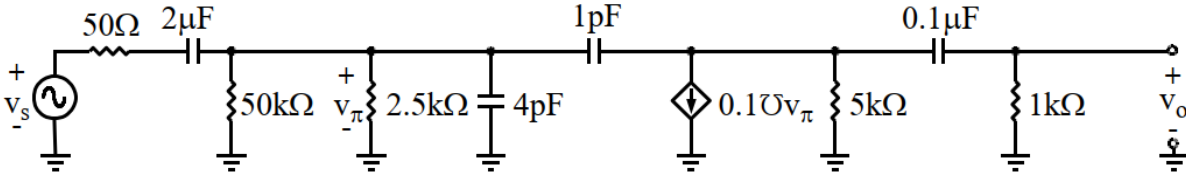


Figure 4

7. For the circuit shown in figure 5 do the following:
 - a. Derive the transfer function exactly.
 - b. Derive the transfer function using the method of open-circuit and short-circuit time constants.

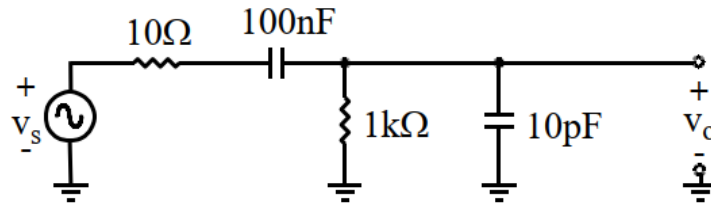


Figure 5

8. For the circuit shown in figure 6, use the $1/3^{\text{rd}}$ rule with $V_B = V_{CC}/3$ to find R_{B1} , R_{B2} , R_C , and R_E given that $V_{CC} = 15V$ and $I_C = 2mA$.

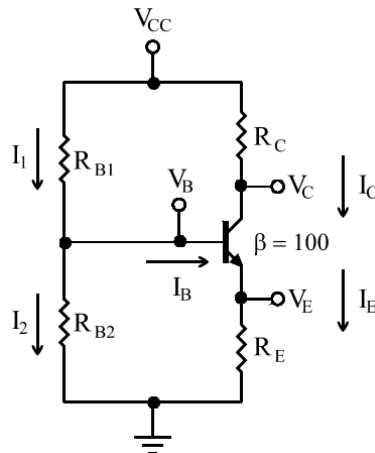


Figure 6

9. For the circuit shown in figure 1, use the $1/3^{\text{rd}}$ rule with $V_E = V_{CC}/3$ to find R_{B1} , R_{B2} , R_C , and I_C , given that $R_E = 8kΩ$ and $V_{CC} = 12V$. (Answers: $R_{B1} \approx 146kΩ$, $R_{B2} \approx 104kΩ$, $R_C \approx 8kΩ$, and $I_C \approx 0.5mA$)

10. What are g_m and r_π for the transistors in P8 and P9 above?

(Answers: P1 $g = 80mΩ^{-1}$ and $r_\pi = 1.25kΩ$;
for P2: $g = 20mΩ^{-1}$ and $r_\pi = 5kΩ$)

11. Assuming that a small-signal a.c. voltage source with a $50Ω$ source impedance is coupled to the amplifier

of P9 above via a $10\mu\text{F}$ coupling capacitor and that R_E is by-passed using a $50\mu\text{F}$ capacitor, and that the hybrid- π model has the following parameters: $C_\pi=10\text{pF}$, $C_\mu=2\text{pF}$ and $r_o=\infty$, what are A_M , $\omega_{3\text{dB}L}$, and $\omega_{3\text{dB}H}$?
(Answerws: $A_M\approx-158$, $\omega_{3\text{dB}L}\approx 400\text{rad/s}$, and $\omega_{3\text{dB}H}\approx 44\text{Mrad/s}$)